

SSC CGL 2017 EXAM PAPER : Held on 09-AUG-2017 Shift-1

(Reasoning)

QID : 1 - In the following question, select the related word from the given alternatives.

Kilometre : Metre :: Tonne : ?

Options:

- 1) Litre
- 2) Kilogram
- 3) Hours
- 4) Weight

Correct Answer: Kilogram

QID : 2 - In the following question, select the related letters from the given alternatives.

AGN : IOV :: BLM : ?

Options:

- 1) JTV
- 2) KTU
- 3) JUV
- 4) TUJ

Correct Answer: JTV

QID : 3 - In the following question, select the related number from the given alternatives.

9143 : 9963 :: 6731 : ?

Options:

- 1) 1368
- 2) 5666
- 3) 8964
- 4) 9694

Correct Answer: 8964

QID : 4 - In the following question, select the odd word from the given alternatives.

Options:

- 1) Chennai
- 2) Daman
- 3) Raipur
- 4) Shimla

Correct Answer: Daman

QID : 5 - In the following question, select the odd letter from the given alternatives.

Options:

- 1) B
- 2) N
- 3) P

4) W

Correct Answer: W

QID : 6 - In the following question, select the odd number from the given alternatives.

Options:

1) 313

2) 426

3) 925

4) 1034

Correct Answer: 313

QID : 7 - Arrange the given words in the sequence in which they occur in the dictionary.

1. Ball

2. Balanced

3. Balls

4. Balance

5. Balancing

Options:

1) 24135

2) 42135

3) 42513

4) 54213

Correct Answer: 42513

QID : 8 - A series is given with one term missing. Select the correct alternative from the given ones that will complete the series.

AG, LR, WC, HN, ?

Options:

1) QY

2) RX

3) SY

4) TZ

Correct Answer: SY

QID : 9 - In the following question, select the missing number from the given series.

13, 16, 11, 18, 9, 20, ?

Options:

1) 3

2) 5

3) 6

4) 7

Correct Answer: 7

QID : 10 - Punit said to a lady, "The sister of your father's wife is my aunt". How is the lady related to Punit?

Options:

- 1) Daughter
- 2) Grand Daughter
- 3) Niece
- 4) Cousin sister

Correct Answer: Cousin sister

QID : 11 - There are 45 trees in a row. The lemon tree is 20th from right end. What is the rank of lemon tree from left end?

Options:

- 1) 26
- 2) 24
- 3) 25
- 4) 27

Correct Answer: 26

QID : 12 - In the following question, from the given alternative words, select the word which cannot be formed using the letters of the given word.

UNIFORMITY

Options:

- 1) ANNUITY
- 2) FORUM
- 3) MINT
- 4) UNIFORM

Correct Answer: ANNUITY

QID : 13 - In a certain code language, "TIRED" is written as "56" and "BRAIN" is written as "44". How is "LAZY" written in that code language?

Options:

1) 64

2) 61

3) 58

4) 43

Correct Answer: 64

QID : 14 - In the following question, by using which mathematical operator will the expression become correct?

18 ? 6 ? 9 ? 27

Options:

1) x, ÷ and =

2) ÷, x and =

3) x, + and =

4) +, – and =

Correct Answer: ÷, x and =

QID : 15 - If 18 (9) 3 and 36 (30) 5, then what is the value of A in 19 (A) 18?

Options:

- 1) 33
- 2) 57
- 3) 75
- 4) 96

Correct Answer: 57

QID : 16 -

In the following question, select the number which can be placed at the sign of question mark (?) from the given alternatives.

निम्नलिखित प्रश्न में दिए गए विकल्पों में से प्रश्न चिह्न (?) के स्थान पर आने वाली संख्या को चुनिए।

1512	504
?	168

Options:

- 1) 53
- 2) 56
- 3) 59

4) 66

Correct Answer: 56

QID : 17 -

How many triangles are there in the given figure?

नीचे दी गई आकृति में कितने त्रिभुज हैं?



Options:

1) 14

2) 15

3) 17

4) 18

Correct Answer: 17

QID : 18 - In the following question below are given some statements followed by some conclusions. Taking the given statements to be true even if they seem to be at variance from commonly known facts, read all the conclusions and then decide which of the given conclusion logically follows the given statements.

Statements:

I. Some pens are pencils.

II. All pencils are erasers.

Conclusions:

I. Some pencils are not pens.

II. Some erasers are not pens.

Options:

1) Only conclusion (I) follows.

2) Only conclusion (II) follows.

3) Neither conclusion (I) nor conclusion (II) follows.

4) Both conclusions follow.

Correct Answer: Neither conclusion (I) nor conclusion (II) follows.

QID : 19 -

Three positions of a cube are shown below. What will come opposite to face containing '4'?

नीचे एक घन की तीन अवस्थाएँ दर्शायी गयी हैं। अंक '4' के विपरीत फलक पर कौन सा अंक आयेगा?



Options:

- 1) 1
- 2) 2
- 3) 4
- 4) 5

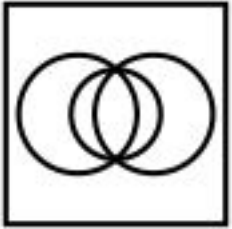
Correct Answer: 1

QID : 20 - Identify the diagram that best represents the relationship among the given classes.

Music Instrument, Piano, Guitar

Options:

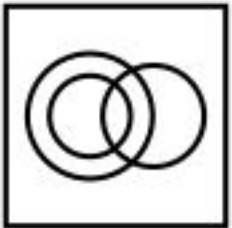
1)



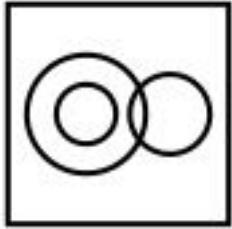
2)



3)



4)

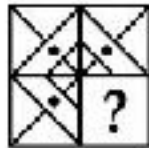


Correct Answer:

QID : 21 -

Which answer figure will complete the pattern in the question figure?

कौन सी उत्तर आकृति प्रश्न आकृति के प्रतिरूप को पूरा करेगी?



Options:

1)



2)



3)



4)



Correct Answer:

QID : 22 -

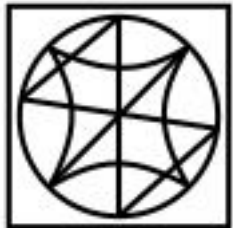
From the given answer figures, select the one in which the question figure is hidden/embedded.

दी गई उत्तर आकृतियों में से उस उत्तर आकृति को चुनिए जिस में प्रश्न आकृति निहित है।



Options:

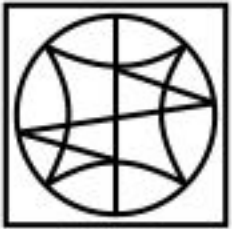
1)



2)



3)



4)



Correct Answer:

QID : 23 -

A piece of paper is folded and punched as shown below in the question figures. From the given answer figures, indicate how it will appear when opened?

नीचे के प्रश्न आकृतियों में दिखाए अनुसार कागज को मोड़कर छेदने तथा खोलने के बाद वह किस उत्तर आकृति जैसा दिखाई देगा?

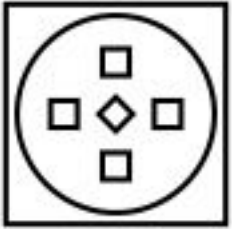


Options:

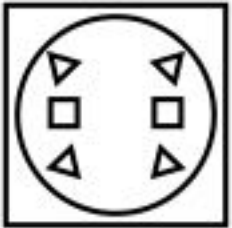
1)



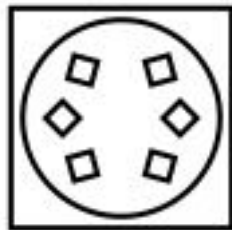
2)



3)



4)

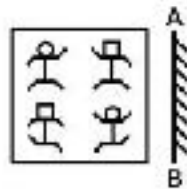


Correct Answer:

QID : 24 -


If a mirror is placed on the line AB, then which of the answer figure is the right image of the given figure?

यदि एक दर्पण को AB रेखा पर रखा जाए, तो दी गई उत्तर आकृतियों में से कौन सी आकृति पश्च आकृति की सही प्रतिबिम्ब होगी?




Options:

1)



2)



3)



4)



Correct Answer:

QID : 25 -

Options:

- 1) 00, 13, 57, 76
- 2) 11, 04, 86, 59
- 3) 23, 22, 99, 95
- 4) 32, 40, 66, 68

Correct Answer: 11, 04, 86, 59

SSC CGL 2017 EXAM PAPER : Held on 09-AUG-2017 Shift-1

(General Awareness)

QID : 26 - Who gave the 'General Equilibrium Theory'?

Options:

- 1) J. M. Keynes
- 2) Leon Walras
- 3) David Ricardo
- 4) Adam Smith

Correct Answer: Leon Walras

QID : 27 - Which of the following is not true about a Demand Draft?

Options:

- 1) It is a negotiable instrument.

- 2) It is a banker's cheque.
- 3) It may be dishonoured for lack of funds.
- 4) It is issued by a bank.

Correct Answer: It may be dishonoured for lack of funds.

QID : 28 - Who administers the oath of the President of India?

Options:

- 1) Governor General of India
- 2) Chief Justice of India
- 3) Prime Minister of India
- 4) Vice President of India

Correct Answer: Chief Justice of India

QID : 29 - Who among the following gave monistic theory of sovereignty?

Options:

- 1) Austin
- 2) Darwin
- 3) Aristotle
- 4) Marx

Correct Answer: Austin

QID : 30 - Which one is the correct chronological order of the following events?

- I. Quit India Movement
- II. Shimla Conference
- III. Poona Pact
- IV. Cabinet Mission

Options:

- 1) II, IV, I, III
- 2) III, IV, II, I
- 3) III, I, II, IV
- 4) IV, II, III, I

Correct Answer: III, I, II, IV

QID : 31 - In 1917, which movement was launched by Mahatma Gandhi from Champaran?

Options:

- 1) Satyagraha
- 2) Non co-operation movement
- 3) Quit India movement
- 4) Swadeshi Movement

Correct Answer: Satyagraha

QID : 32 - What is the name of the tropical cyclones in the China Sea?

Options:

- 1) Hurricanes
- 2) Tornado

3) Twister

4) Typhoon

Correct Answer: Typhoon

QID : 33 - Which among the following country is not a part of Scandinavia?

Options:

1) Norway

2) Finland

3) Sweden

4) Denmark

Correct Answer: Finland

QID : 34 - Cattle quickly swallow grass and store it in their _____.

Options:

1) rumen

2) esophagus

3) small intestine

4) salivary glands

Correct Answer: rumen

QID : 35 - Which of the following carries oxygen to various parts of human body?

Options:

- 1) Red blood cells
- 2) White blood cells
- 3) Plasma
- 4) Nerves

Correct Answer: Red blood cells

QID : 36 - Which of the following function is performed by the kidneys in the human body?

Options:

- 1) Excretion
- 2) Respiration
- 3) Digestion
- 4) Transportation

Correct Answer: Excretion

QID : 37 - The bending of light when it passes around a corner or a slit is due to _____.

Options:

- 1) reflection
- 2) refraction
- 3) diffraction
- 4) total internal reflection

Correct Answer: diffraction

QID : 38 - What is the reason for formation of Mirage in desert?

Options:

- 1) Refraction of light
- 2) Reflection of light
- 3) Total internal reflection of light
- 4) Both Refraction and Total internal reflection of light

Correct Answer: Both Refraction and Total internal reflection of light

QID : 39 - FORTRAN is not used for _____.

- (I) Drawing pictures
- (II) Carrying out mathematics computations

Options:

- 1) Only (I)
- 2) Only (II)
- 3) Both (I) and (II)
- 4) Neither (I) nor (II)

Correct Answer: Both (I) and (II)

QID : 40 - Which of the following bonds are weakest in nature?

Options:

- 1) Single bond

2) Double bond

3) Triple bond

4) Hydrogen bond

Correct Answer: Hydrogen bond

QID : 41 - In the following reaction, fill in the blank.

Acid + Base → _____ + Water

Options:

1) Carbon dioxide

2) Metal Oxide

3) Hydrogen Gas

4) Salt

Correct Answer: Salt

QID : 42 - Bishnoi movement was started against which of the following?

Options:

1) Cutting of Trees

2) Inequality of Women

3) Killing of Animals

4) Increasing Pollution

Correct Answer: Cutting of Trees

QID : 43 - What is the major aim of Pradhan Mantri Ujjwala Yojana?

Options:

- 1) To provide electricity
- 2) To provide LED bulbs
- 3) To provide LPG connections
- 4) To construct village roads

Correct Answer: To provide LPG connections

QID : 44 - Who discovered television?

Options:

- 1) Michael Faraday
- 2) Joseph Henry
- 3) Abbe Caselli
- 4) John Baird

Correct Answer: John Baird

QID : 45 - How many players are there in a team of Volleyball?

Options:

- 1) 2
- 2) 4
- 3) 6

4) 5

Correct Answer: 6

QID : 46 -

Match the following.

निम्नलिखित का मिलात कीजिए।

Temple / मंदिर	Lord / भगवान
1. Lingaraja Temple, Orissa लिंगराज मंदिर, उड़ीसा	a. Lord Mahavira भगवान महावीर
2. Tijara Mandir, Rajasthan तिजारा मंदिर, राजस्थान	b. Lord Vishnu भगवान विष्णु
3. Venkateswara Temple, Tirupati वेंकटेश्वर मंदिर, तिरुपति	c. Lord Shiva भगवान शिव

Options:

1) 1-b, 2-c, 3-a

2) 1-c, 2-a, 3-b

3) 1-a, 2-c, 3-b

4) 1-b, 2-a, 3-c

Correct Answer: 1-c, 2-a, 3-b

QID : 47 - Who among the following has been recently awarded with 'Indian of the year' award?

Options:

- 1) Sunita Rani
- 2) Dhiraj Singh
- 3) Preety Shenoy
- 4) Abhishek Kumar

Correct Answer: Preety Shenoy

QID : 48 - Who is the author of the book titled 'Selection Day'?

Options:

- 1) Aravind Adiga
- 2) Anil Menon
- 3) Krishna Sobti
- 4) Arunava Sinha

Correct Answer: Aravind Adiga

QID : 49 - Which of the following country is not a member of BRICS association?

Options:

- 1) Brazil
- 2) Russia
- 3) Iceland
- 4) China

Correct Answer: Iceland

QID : 50 - With which of its neighbouring country India has Kalapani territorial dispute?

Options:

- 1) Nepal
- 2) Bangladesh
- 3) Pakistan
- 4) Sri Lanka

Correct Answer: Nepal

SSC CGL 2017 EXAM PAPER : Held on 09-AUG-2017 Shift-1

(Mathematics)

QID : 51 -

Which value among $\sqrt[3]{5}$, $\sqrt[3]{8}$, $\sqrt[3]{12}$, $\sqrt[3]{276}$ is the largest?

$\sqrt[3]{5}$, $\sqrt[3]{8}$, $\sqrt[3]{12}$, $\sqrt[3]{276}$ में से सबसे बड़ी संख्या कौन सी है?

Options:

1)

$$\sqrt[3]{5}$$

2)

$$\sqrt[4]{6}$$

3)

$$\sqrt[6]{12}$$

4)

$$\sqrt[6]{12}$$

Correct Answer:

QID : 52 - A piece of work was finished by A, B and C together. A and B together finished 60% of the work and B and C together finished 70% of the work. Who among the three is most efficient?

Options:

1) A

2) B

3) C

4) A or B

Correct Answer: C

QID : 53 - Three solid spheres of radius 3 cm, 4 cm and 5 cm are melted and recasted into a solid sphere. What will be the percentage decrease in the surface area?

Options:

- 1) 12
- 2) 14
- 3) 16
- 4) 28

Correct Answer: 28

QID : 54 - The marked price of a sofa set is Rs 4800 which is sold at Rs 3672 at two successive discounts. If the first discount is 10%, then what will be the second discount (in %)?

Options:

- 1) 13
- 2) 14
- 3) 15
- 4) 17

Correct Answer: 15

QID : 55 - A, B and C invested amounts in the ratio 3 : 4 : 5 respectively. If the schemes offered compound interest at the rate of 20% per annum, 15% per annum and 10% per annum respectively, then what will be the ratio of their amounts after 1 year?

Options:

- 1) 3 : 15 : 25
- 2) 6 : 6 : 5
- 3) 36 : 46 : 55

4) 12 : 23 : 11

Correct Answer: 36 : 46 : 55

QID : 56 - The average age of 120 members of a society is 60.7 years. By addition of 30 new members, the average age becomes 56.3 years. What is the average age (in years) of newly joined members?

Options:

1) 36.5

2) 37.2

3) 38.3

4) 38.7

Correct Answer: 38.7

QID : 57 - By selling 175 pineapples, the gain is equal to the selling price of 50 pineapples. What is the gain percentage?

Options:

1) 28

2) 30

3) 32

4) 40

Correct Answer: 40

QID : 58 - If A has got 20% more marks than B, then by what percent marks of B are less than the marks of A?

Options:

- 1) 16.66
- 2) 20
- 3) 33.33
- 4) 14.28

Correct Answer: 16.66

QID : 59 - A train leaves Delhi at 10 a.m. and reaches Jaipur at 4 p.m. on same day. Another train leaves Jaipur at 12 p.m. and reaches Delhi at 5 p.m. on same day. What is the time of day (approximately) when the two trains will meet?

Options:

- 1) 1:42 p.m.
- 2) 1:27 p.m.
- 3) 2:04 p.m.
- 4) 1:49 p.m.

Correct Answer: 1:49 p.m.

QID : 60 - The difference between the compound interest compounding half yearly for 1 year and the simple interest for 1 year on a certain sum of money lent out at 8% per annum is Rs 64. What is the sum (in Rs)?

Options:

- 1) 40000
- 2) 42000
- 3) 44000

4) 44800

Correct Answer: 40000

QID : 61 - If $(x - 2)$ and $(x + 3)$ are the factors of the equation $x^2 + k_1x + k_2 = 0$, then what are the values of k_1 and k_2 ?

Options:

1) $k_1 = 6, k_2 = -1$

2) $k_1 = 1, k_2 = -6$

3) $k_1 = 1, k_2 = 6$

4) $k_1 = -6, k_2 = 1$

Correct Answer: $k_1 = 1, k_2 = -6$

QID : 62 - If $(x - y) = 7$, then what is the value of $(x - 15)^3 - (y - 8)^3$?

Options:

1) 0

2) 343

3) 392

4) 2863

Correct Answer: 0

QID : 63 - If $x - y - \sqrt{18} = -1$ and $x + y - 3\sqrt{2} = 1$, then what is the value of $12xy(x^2 - y^2)$?

Options:

1) 0

2) 1

3) $512\sqrt{2}$

4) $612\sqrt{2}$

Correct Answer: $612\sqrt{2}$

QID : 64 - If $p/q = r/s = t/u = \sqrt{5}$, then what is the value of $[(3p^2 + 4r^2 + 5t^2)/(3q^2 + 4s^2 + 5u^2)]$?

Options:

1) $1/5$

2) 5

3) 25

4) 60

Correct Answer: 5

QID : 65 - In triangle ABC, a line is drawn from the vertex A to a point D on BC. If $BC = 9$ cm and $DC = 3$ cm, then what is the ratio of the areas of triangle ABD and triangle ADC respectively?

Options:

1) 1 : 1

2) 2 : 1

3) 3 : 1

4) 4 : 1

Correct Answer: 2 : 1

QID : 66 - PQR is a right angled triangle in which $\angle R = 90^\circ$. If $RS \perp PQ$, $PR = 3$ cm and $RQ = 4$ cm, then what is the value of RS (in cm)?

Options:

1) $12/5$

2) $36/5$

3) 5

4) 2.5

Correct Answer: $12/5$

QID : 67 - In triangle PQR, A is the point of intersection of all the altitudes and B is the point of intersection of all the angle bisectors of the triangle. If $\angle PBR = 105^\circ$, then what is the value of $\angle PAR$ (in degrees)?

Options:

1) 60

2) 100

3) 105

4) 115

Correct Answer: 60

QID : 68 - If there are four lines in a plane, then what cannot be the number of points of intersection of these lines?

Options:

- 1) 0
- 2) 5
- 3) 4
- 4) 7

Correct Answer: 7

QID : 69 - What is the simplified value of $\operatorname{cosec} 2A + \cot 2A$?

Options:

- 1) $\sec A$
- 2) $\sec (A/2)$
- 3) $\cot A$
- 4) $\cot 2A$

Correct Answer: $\cot A$

QID : 70 - If $A = 30^\circ$, $B = 60^\circ$ and $C = 135^\circ$, then what is the value of $\sin 3A + \cos 3B + \tan 3C - 3\sin A \cos B \tan C$?

Options:

- 1) 0
- 2) 1
- 3) 8
- 4) 9

Correct Answer: 0

QID : 71 - What is the least value of $\tan^2 \theta + \cot^2 \theta + \sin^2 \theta + \cos^2 \theta + \sec^2 \theta + \operatorname{cosec}^2 \theta$?

Options:

1) 1

2) 3

3) 5


4) 7

Correct Answer: 7

QID : 72 -

The pie chart given below shows the break-up of number of hours of teaching various subjects at an institute by Mr. Raghav.

नीचे दिए गए वृत्त चित्र में श्री राघव द्वारा किसी संस्थान में विभिन्न विषयों को पढ़ाने के घंटों की संख्याओं के वर्गीकरण को दर्शाया गया है।



If Mr. Raghav taught a total of 500 hours, then what is the difference in number of hours of teaching algebra and modern Maths?

Options:

1) 15

2) 20

3) 25

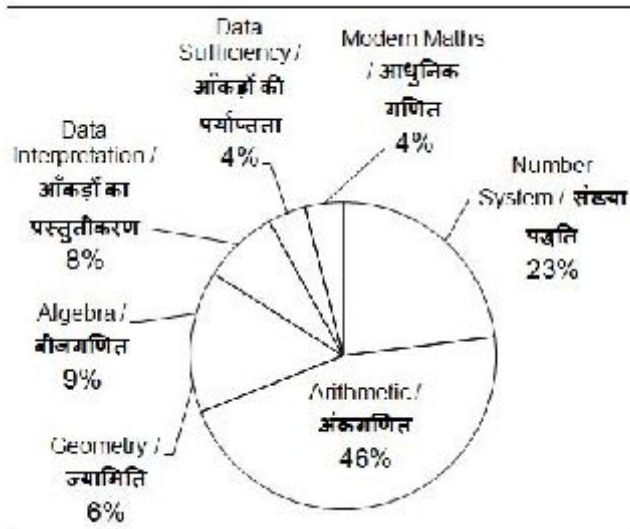
4) 40

Correct Answer: 25

QID : 73 -

The pie chart given below shows the break-up of number of hours of teaching various subjects at an institute by Mr. Raghav.

नीचे दिए गए वृत्त चित्र में श्री राघव द्वारा किसी संस्थान में विभिन्न विषयों को पढ़ाने के घंटों की संख्याओं के वर्गीकरण को दर्शाया गया है।



Mr. Raghav taught Geometry for 36 hours. If the time taken in teaching Ratio constitutes one-fourth of the time for Arithmetic, then for how much time (in hours) did he taught the topic of Ratio?

Options:

- 1) 46
- 2) 51.75
- 3) 69

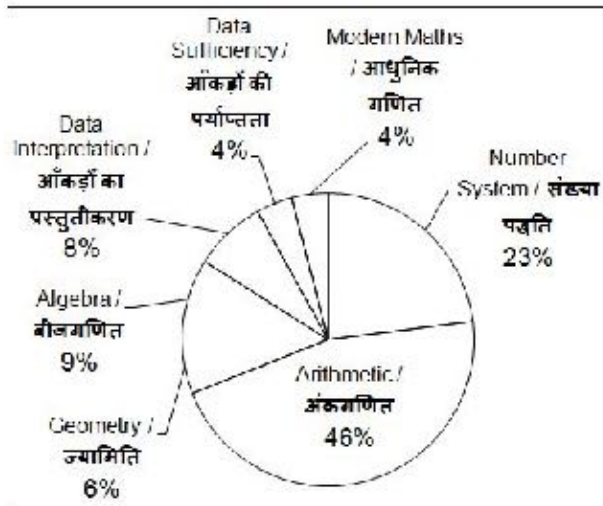
4) 103.5

Correct Answer: 69

QID : 74 -

The pie chart given below shows the break-up of number of hours of teaching various subjects at an institute by Mr. Raghav.

नीचे दिए गए वृत्त चित्र में श्री राघव द्वारा किसी संस्थान में विभिन्न विषयों को पढ़ाने के घंटों की संख्याओं के वर्गीकरण को दर्शाया गया है।



If Data Interpretation and Modern Maths were taught for a combined time of 96 hours, then for how much time (in hours) were Number system and Geometry taught?

Options:

1) 136

2) 184

3) 216


4) 232

Correct Answer: 232

QID : 75 -

The pie chart given below shows the break-up of number of hours of teaching various subjects at an institute by Mr. Raghav.

नीचे दिए गए दृढ़ चित्र में श्री राघव द्वारा किसी संस्थान में विभिन्न विषयों को पढ़ाने के घंटों की संख्याओं के वर्गीकरण को दर्शाया गया है।



A new topic named Problem Solving was also introduced and it was decided that 10% time of all topics except Arithmetic will be devoted to it. What will be the central angle (in degrees) made by Problem Solving in the new pie chart?

Options:

1) 17.28

2) 18

3) 19.44

4) 36

Correct Answer: 19.44

SSC CGL 2017 EXAM PAPER : Held on 09-AUG-2017 Shift-1

(English Comprehension)

QID : 76 - In the following question, some part of the sentence may have errors. Find out which part of the sentence has an error and select the appropriate option. If a sentence is free from error, select 'No error'.

If you had (1)/ told me earlier (2)/ I will help you. (3)/ No Error (4)

Options:

1) 1

2) 2

3) 3

4) 4

Correct Answer: 3

QID : 77 - In the following question, some part of the sentence may have errors. Find out which part of the sentence has an error and select the appropriate option. If a sentence is free from error, select 'No error'.

Her mother is (1)/ angry and (2)/ indifferent to me. (3)/ No Error (4)

Options:

- 1) 1
- 2) 2
- 3) 3
- 4) 4

Correct Answer: 2

QID : 78 - In the following question, the sentence given with blank to be filled in with an appropriate word. Select the correct alternative out of the four and indicate it by selecting the appropriate option.

Don't loiter _____ the corridor.

Options:

- 1) around
- 2) off
- 3) of
- 4) at

Correct Answer: around

QID : 79 - In the following question, the sentence given with blank to be filled in with an appropriate word. Select the correct alternative out of the four and indicate it by selecting the appropriate option.

I will scold him when _____.

Options:

- 1) he will come
- 2) he comes
- 3) he would come
- 4) he had come.

Correct Answer: he comes

QID : 80 - In the following question, out of the four alternatives, select the word similar in meaning to the word given.

Mellifluous

Options:

- 1) Shiver
- 2) Frank
- 3) Immoral
- 4) Dulcet

Correct Answer: Dulcet

QID : 81 - In the following question, out of the four alternatives, select the word similar in meaning to the word given.

Dodge

Options:

- 1) Soften
- 2) Order

3) Avoid

4) Chaotic

Correct Answer: Avoid

QID : 82 - In the following question, out of the four alternatives, select the word opposite in meaning to the word given.

Meretricious

Options:

1) Brazen

2) Natural

3) Exemplary

4) Gaudy

Correct Answer: Natural

QID : 83 - In the following question, out of the four alternatives, select the word opposite in meaning to the word given.

Nebulous

Options:

1) Definite

2) Inchoate

3) Dismal

4) Sullen

Correct Answer: Definite

QID : 84 - In the following question, out of the four alternatives, select the alternative which best expresses the meaning of the idiom/Phrase.

Spick and Span

Options:

- 1) High and low
- 2) Dark and light
- 3) Neat and clean
- 4) Happy and sad

Correct Answer: Neat and clean

QID : 85 - In the following question, out of the four alternatives, select the alternative which best expresses the meaning of the idiom/Phrase.

To draw the longbow

Options:

- 1) To nullify
- 2) To exaggerate
- 3) To underrate
- 4) To demarcate

Correct Answer: To exaggerate

QID : 86 - Improve the bracketed part of the sentence.

By rescuing the child from fire, the local resident (added another feather to his cap.)

Options:

- 1) made a significant achievement
- 2) was gifted with precious thing
- 3) was crowned and rewarded
- 4) No improvement

Correct Answer: made a significant achievement

QID : 87 - Improve the bracketed part of the sentence.

The government plans to (take up) the construction project soon.

Options:

- 1) Take on
- 2) Take off
- 3) Take in
- 4) No improvement

Correct Answer: No improvement

QID : 88 - In the following question, out of the four alternatives, select the alternative which is the best substitute of the phrase.

A man devoid of kind feeling and sympathy.

Options:

- 1) Callous
- 2) Credulous
- 3) Gullible
- 4) Bohemian

Correct Answer: Callous

QID : 89 - In the following question, out of the four alternatives, select the alternative which is the best substitute of the phrase.

One who eats too much

Options:

- 1) Impostor
- 2) Glutton
- 3) Hypochondriac
- 4) Intestate

Correct Answer: Glutton

QID : 90 - In the following question, four words are given out of which one word is incorrectly spelt. Find the incorrectly spelt word.

Options:

- 1) Forfeit
- 2) Gorilla
- 3) Blissfull
- 4) Corrupt

Correct Answer: Blissfull

QID : 91 - In the following question, four words are given out of which one word is incorrectly spelt. Find the incorrectly spelt word.

Options:

- 1) Afforestation
- 2) Translucent

3) Foreigner

4) Achievement

Correct Answer: Translucent

QID : 92 - The question below consists of a set of labelled sentences. Out of the four options given, select the most logical order of the sentences to form a coherent paragraph.

P- The aim must be to ensure that our country does not experience either paucity or a-surfeit of trained manpower in any specific segment of our economy.

Q- When we set about the task of higher education, we should be absolutely clear in our perception of the goals of education in the specific context of our nation's development.

R- No doubt, one of the important aims of education would be to create the required range and nature of trained manpower assessed to be needed by different sectors of national growth.

S- The entire educational apparatus must be geared progressively to fulfill the requirements of different phases of our growth in every sector primary, secondary and tertiary.

Options:

1) SQPR

2) QRSP

3) SRQP

4) PSQR

Correct Answer: QRSP

QID : 93 - The question below consists of a set of labelled sentences. Out of the four options given, select the most logical order of the sentences to form a coherent paragraph.

P- Bureaucratic cultures can smother those who want to respond to shifting conditions.

Q- Arrogant managers can overevaluate their current performance and competitive position listen poorly and learn slowly.

R- And the lack of leadership leaves no force inside these organizations to break out of the morass.

S- Inwardly focused employees can have difficulty seeing the very forces that present threats and opportunities.

Options:

1) PRQS

2) SPQR

3) RQPS

4) QSPR

Correct Answer: QSPR

QID : 94 - In the following question, a sentence has been given in Active/Passive voice. Out of four alternatives suggested, select the one which best expresses the same sentence in Passive/Active voice.

She teaches us English.

Options:

1) English is being taught to us by her.

2) We are taught English by her.

3) English have been taught to us by her.

4) We had been taught English by her.

Correct Answer: We are taught English by her.

QID : 95 - In the following question, a sentence has been given in Direct/Indirect speech. Out of the four alternatives suggested, select the one which best expresses the same sentence in Indirect/Direct speech.

Nisha said to Swati, " Will you help me in my project just now?"

Options:

- 1) Nisha told Swati whether she will help her in her project just now.
- 2) Nisha asked Swati if she would help her in her project just then.
- 3) Nisha questioned to Swati that will you help me in my project just now.
- 4) Nisha asked to Swati that will she help her in her work just now.

Correct Answer: Nisha asked Swati if she would help her in her project just then.

QID : 96 - In the following passage some of the words have been left out. Read the passage carefully and select the correct answer for the given blank out of the four alternatives.

Democracy should _____ dignity of the individual. It should also aim at the _____ good of the greatest _____. The opposition party should _____ the wrong plans, policies and decisions of the government in power. The government should cater to the _____ needs of the people to make its position solid.

Democracy should _____ dignity of the individual.

Options:

- 1) built
- 2) ensure
- 3) keep
- 4) support

Correct Answer: ensure

QID : 97 - In the following passage some of the words have been left out. Read the passage carefully and select the correct answer for the given blank out of the four alternatives.

Democracy should _____ dignity of the individual. It should also aim at the _____ good of the greatest _____. The opposition party should _____ the wrong plans, policies and decisions of the government in power. The government should cater to the _____ needs of the people to make its position solid.

It should also aim at the _____ good

Options:

- 1) greatest
- 2) smallest
- 3) largest
- 4) heaviest

Correct Answer: greatest

QID : 98 - In the following passage some of the words have been left out. Read the passage carefully and select the correct answer for the given blank out of the four alternatives.

Democracy should _____ dignity of the individual. It should also aim at the _____ good of the greatest _____. The opposition party should _____ the wrong plans, policies and decisions of the government in power. The government should cater to the _____ needs of the people to make its position solid.

of the greatest _____. The opposition party

Options:

- 1) people
- 2) digit
- 3) number
- 4) individual

Correct Answer: number

QID : 99 - In the following passage some of the words have been left out. Read the passage carefully and select the correct answer for the given blank out of the four alternatives.

Democracy should _____ dignity of the individual. It should also aim at the _____ good of the greatest _____. The opposition party should _____ the wrong plans, policies and decisions of the government in power. The government should cater to the _____ needs of the people to make its position solid.

should _____ the wrong plans, policies and decisions of the government in power.

Options:

- 1) rely on
- 2) against
- 3) support
- 4) oppose

Correct Answer: oppose

QID : 100 - In the following passage some of the words have been left out. Read the passage carefully and select the correct answer for the given blank out of the four alternatives.

Democracy should _____ dignity of the individual. It should also aim at the _____ good of the greatest _____. The opposition party should _____ the wrong plans, policies and decisions of the government in power. The government should cater to the _____ needs of the people to make its position solid.

The government should cater to the _____ needs of the people to make its position solid.

Options:

- 1) genuine
- 2) mere
- 3) emotional

4) luxurious

Correct Answer: genuine